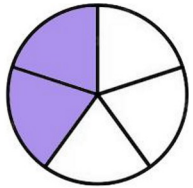




Pinta la fracció indicada:




$$\frac{2}{5}$$




$$\frac{3}{4}$$




$$\frac{5}{5}$$




$$\frac{3}{6}$$




$$\frac{1}{3}$$




$$\frac{4}{6}$$




$$\frac{5}{7}$$




$$\frac{2}{4}$$




$$\frac{8}{10}$$




$$\frac{4}{6}$$




$$\frac{7}{9}$$




$$\frac{6}{7}$$



$$\frac{2}{8}$$




$$\frac{4}{10}$$




$$\frac{4}{7}$$


Pinta la fracció indicada:




$$\frac{4}{9}$$




$$\frac{2}{5}$$




$$\frac{4}{5}$$




$$\frac{9}{10}$$




$$\frac{4}{6}$$




$$\frac{6}{7}$$




$$\frac{2}{4}$$




$$\frac{1}{4}$$




$$\frac{1}{5}$$




$$\frac{3}{6}$$




$$\frac{7}{9}$$




$$\frac{6}{10}$$



$$\frac{4}{8}$$




$$\frac{5}{5}$$




$$\frac{1}{8}$$


Pinta la fracció indicada:




$$\frac{5}{7}$$




$$\frac{7}{8}$$




$$\frac{5}{8}$$




$$\frac{4}{4}$$




$$\frac{4}{6}$$




$$\frac{1}{10}$$




$$\frac{2}{5}$$




$$\frac{2}{3}$$




$$\frac{2}{9}$$




$$\frac{6}{7}$$




$$\frac{3}{8}$$




$$\frac{5}{10}$$



$$\frac{5}{6}$$



$$\frac{3}{4}$$




$$\frac{3}{9}$$

Nom: _____


Data: ____ / ____ / ____

Curs: ____


Pinta la fracció indicada:




$$\frac{2}{3}$$




$$\frac{1}{7}$$




$$\frac{4}{8}$$




$$\frac{8}{10}$$




$$\frac{2}{6}$$




$$\frac{3}{3}$$




$$\frac{9}{9}$$




$$\frac{5}{6}$$




$$\frac{5}{9}$$




$$\frac{4}{7}$$




$$\frac{4}{9}$$




$$\frac{1}{4}$$



$$\frac{5}{8}$$



$$\frac{6}{10}$$



$$\frac{3}{4}$$