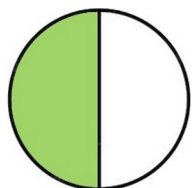


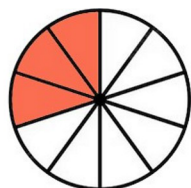
Encercla la fracció correcta:



$$\frac{1}{2}$$

$$\frac{4}{5}$$

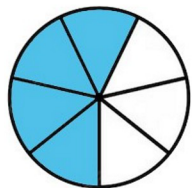
$$\frac{2}{6}$$



$$\frac{4}{9}$$

$$\frac{4}{6}$$

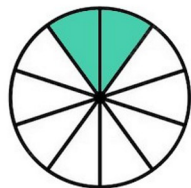
$$\frac{3}{10}$$



$$\frac{3}{5}$$

$$\frac{4}{7}$$

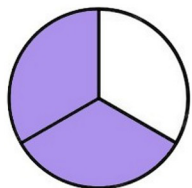
$$\frac{5}{8}$$



$$\frac{1}{10}$$

$$\frac{2}{10}$$

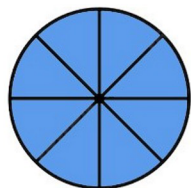
$$\frac{1}{2}$$



$$\frac{2}{3}$$

$$\frac{4}{6}$$

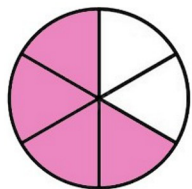
$$\frac{3}{3}$$



$$\frac{8}{8}$$

$$\frac{8}{9}$$

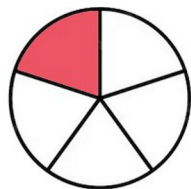
$$\frac{3}{5}$$



$$\frac{4}{9}$$

$$\frac{5}{10}$$

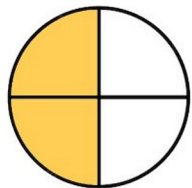
$$\frac{4}{6}$$



$$\frac{7}{9}$$

$$\frac{8}{10}$$


$$\frac{1}{5}$$



$$\frac{5}{8}$$

$$\frac{1}{3}$$

$$\frac{2}{4}$$

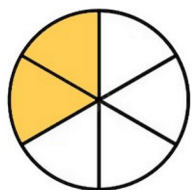


$$\frac{8}{9}$$

$$\frac{4}{4}$$

$$\frac{4}{8}$$

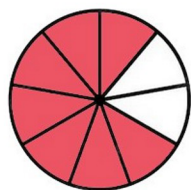
Encercla la fracció correcta:



$$\frac{5}{5}$$

$$\frac{2}{3}$$

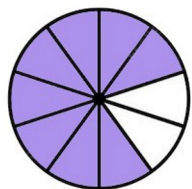
$$\frac{2}{6}$$



$$\frac{1}{5}$$

$$\frac{1}{2}$$

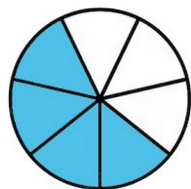
$$\frac{7}{9}$$



$$\frac{5}{8}$$

$$\frac{8}{10}$$

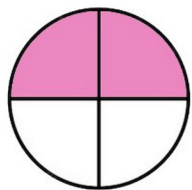
$$\frac{4}{6}$$



$$\frac{8}{9}$$

$$\frac{4}{7}$$

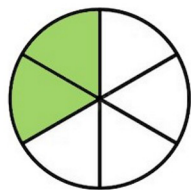
$$\frac{7}{7}$$



$$\frac{8}{9}$$

$$\frac{6}{10}$$

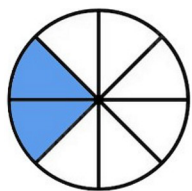
$$\frac{2}{4}$$



$$\frac{2}{6}$$

$$\frac{5}{5}$$

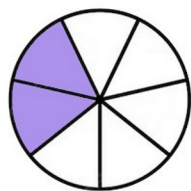
$$\frac{5}{8}$$



$$\frac{4}{7}$$

$$\frac{2}{8}$$

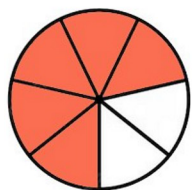
$$\frac{2}{7}$$



$$\frac{3}{5}$$

$$\frac{2}{4}$$

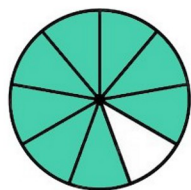
$$\frac{2}{7}$$



$$\frac{5}{8}$$

$$\frac{2}{6}$$

$$\frac{5}{7}$$

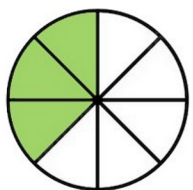


$$\frac{2}{9}$$

$$\frac{8}{9}$$

$$\frac{8}{10}$$

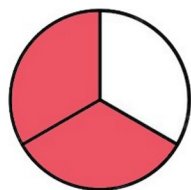
Encercla la fracció correcta:



$$\frac{8}{9}$$

$$\frac{3}{8}$$

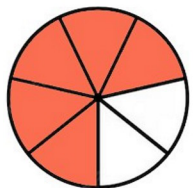
$$\frac{5}{9}$$



$$\frac{4}{8}$$

$$\frac{2}{3}$$

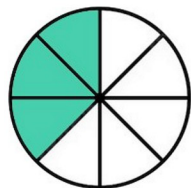
$$\frac{7}{9}$$



$$\frac{1}{2}$$

$$\frac{1}{7}$$

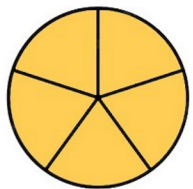
$$\frac{5}{7}$$



$$\frac{3}{9}$$

$$\frac{2}{4}$$

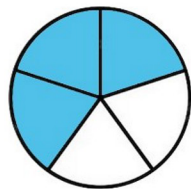
$$\frac{3}{8}$$



$$\frac{5}{5}$$

$$\frac{4}{5}$$

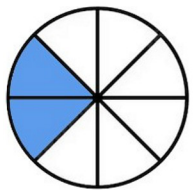
$$\frac{7}{8}$$



$$\frac{3}{5}$$

$$\frac{2}{5}$$

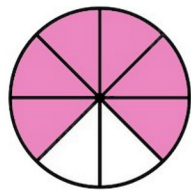
$$\frac{1}{7}$$



$$\frac{2}{3}$$

$$\frac{2}{4}$$

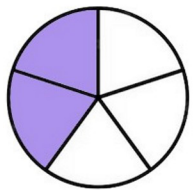
$$\frac{2}{8}$$



$$\frac{2}{5}$$

$$\frac{2}{8}$$

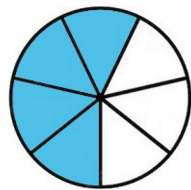
$$\frac{6}{8}$$



$$\frac{5}{8}$$

$$\frac{2}{5}$$

$$\frac{3}{5}$$

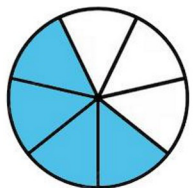


$$\frac{4}{9}$$

$$\frac{4}{7}$$

$$\frac{5}{8}$$

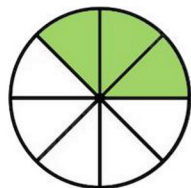
Encercla la fracció correcta:



$$\frac{4}{5}$$

$$\frac{4}{7}$$

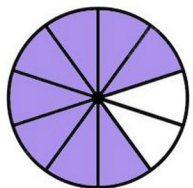
$$\frac{3}{3}$$



$$\frac{5}{9}$$

$$\frac{3}{5}$$

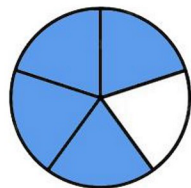
$$\frac{3}{8}$$



$$\frac{1}{4}$$

$$\frac{10}{10}$$

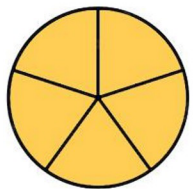
$$\frac{8}{10}$$



$$\frac{5}{7}$$

$$\frac{5}{8}$$

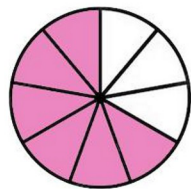
$$\frac{4}{5}$$



$$\frac{5}{5}$$

$$\frac{6}{8}$$

$$\frac{8}{9}$$



$$\frac{5}{8}$$

$$\frac{6}{8}$$

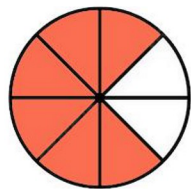
$$\frac{6}{9}$$



$$\frac{2}{10}$$

$$\frac{5}{7}$$

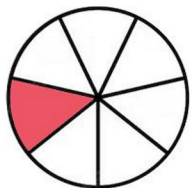
$$\frac{5}{10}$$



$$\frac{2}{5}$$

$$\frac{5}{8}$$

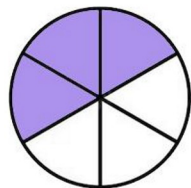
$$\frac{6}{8}$$



$$\frac{4}{10}$$

$$\frac{2}{7}$$

$$\frac{1}{7}$$



$$\frac{3}{6}$$

$$\frac{5}{8}$$

$$\frac{7}{8}$$